

A quelle fraction de ces figures correspond la partie coloriée en rouge ?

$$\frac{2}{8}$$

$$\frac{1}{8}$$

$$\frac{3}{7}$$

$$\frac{5}{7}$$

$$\frac{3}{8}$$

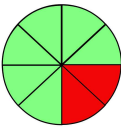
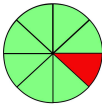
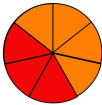



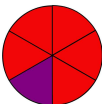

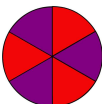

$$\frac{6}{8}$$

$$\frac{5}{6}$$

$$\frac{4}{8}$$

$$\frac{3}{6}$$

$$\frac{2}{3}$$

	$\frac{5}{6}$	<b>Deux huitièmes</b>
	$\frac{1}{8}$	<b>Un huitième</b>
	$\frac{3}{7}$	<b>Trois septièmes</b>
	$\frac{5}{7}$	<b>Cinq septièmes</b>
	$\frac{3}{8}$	<b>Trois huitièmes</b>
	$\frac{6}{8}$	<b>Six huitièmes</b>
	$\frac{5}{6}$	<b>Cinq sixièmes</b>
	$\frac{4}{8}$	<b>Quatre huitièmes</b>
	$\frac{3}{6}$	<b>Trois sixièmes</b>
	$\frac{2}{3}$	<b>Deux tiers</b>

