

A quelle fraction de ces figures correspond la partie colorée en rouge ?

$$\frac{3}{4}$$

$$\frac{4}{6}$$

$$\frac{7}{6}$$

$$\frac{5}{8}$$

$$\frac{1}{4}$$

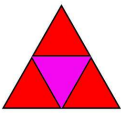

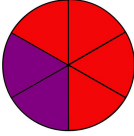

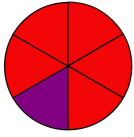

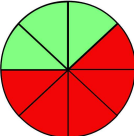

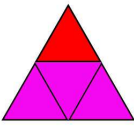

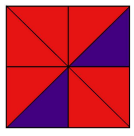

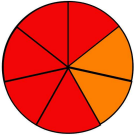





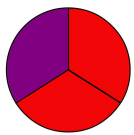
$$\frac{6}{8}$$

$$\frac{5}{7}$$

$$\frac{2}{6}$$

$$\frac{3}{8}$$

$$\frac{4}{6}$$

	$\frac{3}{4}$	Trois quarts	
	$\frac{4}{6}$	Quatre sixièmes	
	$\frac{5}{6}$	Cinq sixièmes	
	$\frac{5}{8}$	Cinq huitièmes	
	$\frac{1}{4}$	Un quart	
	$\frac{6}{8}$	Six huitièmes	
	$\frac{5}{7}$	Cinq septièmes	
	$\frac{2}{6}$	Deux sixièmes	
	$\frac{3}{8}$	Deux cinquièmes	
	$\frac{4}{6}$	Deux tiers	