

A quelle fraction de ces figures correspond la partie colorée en rouge ?

$$\frac{2}{4}$$

$$\frac{3}{8}$$

$$\frac{4}{7}$$

$$\frac{1}{8}$$

$$\frac{3}{6}$$


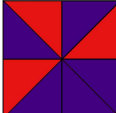



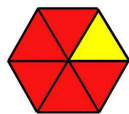

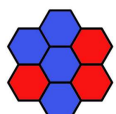
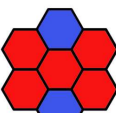
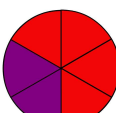
$$\frac{5}{6}$$

$$\frac{1}{6}$$

$$\frac{3}{7}$$

$$\frac{5}{7}$$

$$\frac{4}{6}$$

	$\frac{2}{4}$	Deux quarts
	$\frac{3}{8}$	Trois huitièmes
	$\frac{4}{7}$	Quatre septièmes
	$\frac{1}{8}$	Un huitième
	$\frac{3}{6}$	Trois sixièmes
	$\frac{5}{6}$	Cinq sixièmes
	$\frac{1}{6}$	Un sixième
	$\frac{3}{7}$	Trois septièmes
	$\frac{5}{7}$	Cinq septièmes
	$\frac{4}{6}$	Quatre sixièmes

