

A quelle fraction de ces figures correspond la partie coloriée en rouge ?

$$\frac{6}{8}$$

$$\frac{2}{8}$$

$$\frac{1}{5}$$

$$\frac{6}{7}$$

$$\frac{3}{4}$$

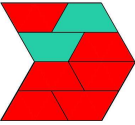
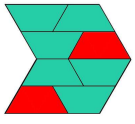
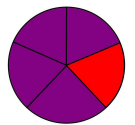
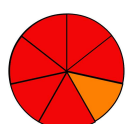
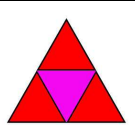
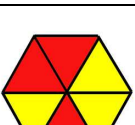
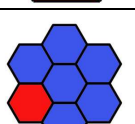
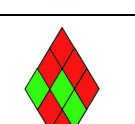
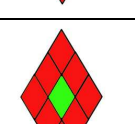
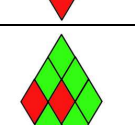
$$\frac{3}{6}$$

$$\frac{1}{6}$$

$$\frac{6}{9}$$

$$\frac{8}{9}$$

$$\frac{2}{9}$$

	$\frac{6}{8}$	<b>Six huitièmes</b>
	$\frac{2}{8}$	<b>Deux huitièmes</b>
	$\frac{1}{5}$	<b>Un cinquième</b>
	$\frac{6}{7}$	<b>Six septièmes</b>
	$\frac{3}{4}$	<b>Trois quarts</b>
	$\frac{3}{6}$	<b>Trois sixièmes</b>
	$\frac{1}{6}$	<b>Un sixième</b>
	$\frac{6}{9}$	<b>Six neuvièmes</b>
	$\frac{8}{9}$	<b>Huit neuvièmes</b>
	$\frac{2}{9}$	<b>Deux neuvièmes</b>

